



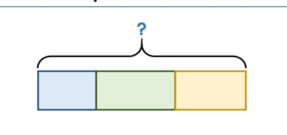
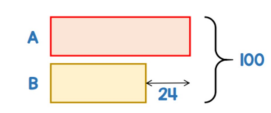
Learn. Play. Create

**1 Questions 1 & 2**

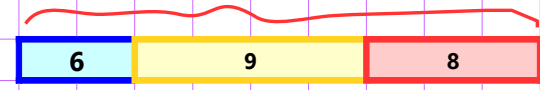
Fri 8 Nov **BARVEMBER** White Rose Maths

**1** Annie bakes some cookies.   
In the morning she sells 6 cookies.  
In the afternoon she sells 9 cookies.  
There are 8 cookies left over.  
How many cookies did she bake?

**2** Meg has two number cards.   
• A is bigger than B  
• The sum of A and B is 100  
• The difference between A and B is 24  
What is the value of A?

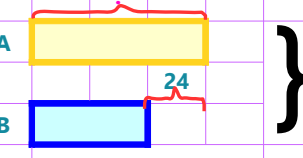
**2 Answer for Question 1**



Total flowers =  $6 + 9 + 8 = 23$

**23** cookies

**3 Answer for Question 2**



$2 \times A = 100 + 24$   
 $A = 124/2 = 62$

**62** A's value

**7 Questions 5**

Fri 8 Nov **BARVEMBER** White Rose Maths **The Daily Challenge**

**5** Holly gets some money for her birthday. She buys a pair of jeans, some shoes and a new coat.

- She spends 20% of her money on some Jeans.
- The coat costs her £21 more than the shoes.
- The shoes cost £32
- She is left with  $\frac{3}{8}$  of the money that she started with.

How much did the jeans cost?

chooMantra – Its Magical !

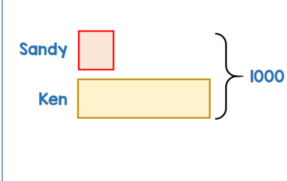
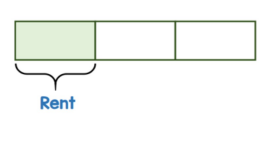
Apps, Skills, Gamification of education - <http://www.choomantra.com/rajeevgm-notes/apps/>

**4 Questions 3 & 4**

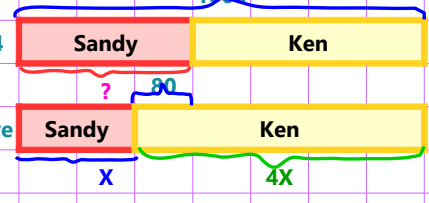
Fri 8 Nov **BARVEMBER** White Rose Maths

**3** Sandy and Ken have 1,000 stickers in total. Sandy gives Ken 80 stickers. Ken now has 4 times as many stickers as Sandy. How many stickers did Sandy have at the start?

**4** Every month John spends  $\frac{1}{3}$  of his money on rent. Of the remaining money he spends 25% on going out. He spends £460 on bills and has £50 left over. How much money does John earn every month?

**5 Answer for Question 3**



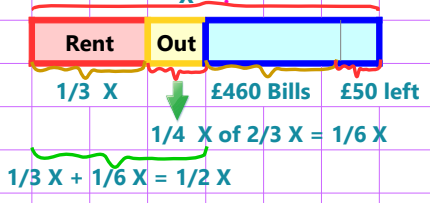
$5X = 1000; X=200$

At start Sandy had  $X + 80 = 200 + 80 = 280$

Note : bars are not drawn to scale

**280** stickers

**6 Answer for Question 4**

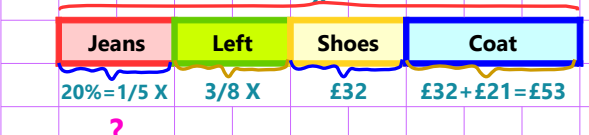


$1/3 X + 1/6 X = 1/2 X$

$1/2 X = 460 + 50 = 510; X = 510 \times 2 = 1020$

**£1020** earning

**8 Answer for Question 5**



$X - 1/5 X - 3/8 X = 32 + 53 = 85$

$17/40 X = 85$

$1/5 X = 85 \times 8/17 = 40$

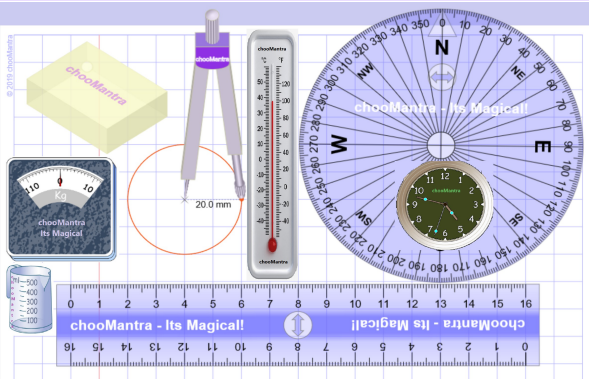
Note : bars are not drawn to scale

**£40** cost of Jeans


chooMantra – Its Magical !

Play Times Table Quiz on Alexa – <http://bit.do/AlexaTimesTableQuiz>


**9 Part of chooMantra Maths Initiative**



Download this sheet.  
A3 and A4 size available for printing  
Compiled, Edited & Designed by  
**Rajeev G.Mavinkurve**



**10 Essence of chooMantra**



chooMantra - Its Magical

Light of Knowledge  
Mantra - hidden secrets of Knowledge

@RajeevGM, @chooMantra

**11 Alexa Times Table Quiz**



Times Table Quiz by RajeevGM

Free to Enable

This is quiz on Times Tables by @RajeevGM.

Play Times Table Quiz, learn quick recall and master Multiplication Skills.


**12 Instructions to Enable and use Alexa Skill**

**Enable Skill**

In Alexa app menu, select Skills. Search "Times Table Quiz RajeevGM". Click on the skill displayed and click on "Enable Skill".

**OR** visit <http://bit.do/AlexaTimesTableQuiz>. And click on "Enable Skill". You will need to be logged into Alexa account

**Use Skill**



After enabling the skill, switch on Alexa enabled device. Once ready say "**Alexa, Launch Times Table Quiz**".

Give a man a bowl of rice, you feed him for a day. Teach him farming, you feed him for life.

<http://choomantra.com/downloads>

@RajeevGM, @chooMantra

