

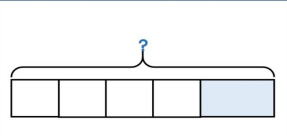
Learn. Play. Create

1 Questions 1 & 2

Mon 25 Nov **BARVEMBER** 2019

1 Tommy has a ball of string. He cuts off four equal pieces of string. Each piece is 7 cm. There is 8 cm of string left. What was the total length of the ball of string?

2 Whitney is thinking of two numbers. The sum of the two numbers is 78. The smaller number is 31. What is the difference between the two numbers?

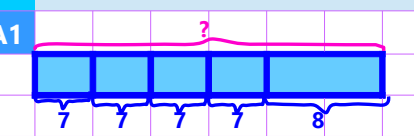


1st Number

2nd Number

2 Answer for Question 1

A1

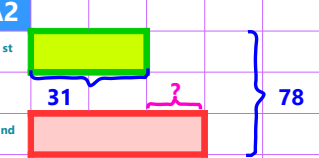


36cm length of string

Total length of the ball of string = $7 \times 4 + 8 = 36$

5 Answer for Question 2

A2



16cm difference

Difference = $78 - 2 \times 31 = 16$

6 Challenge Question 5

Mon 25 Nov **BARVEMBER** 2019

The Daily Challenge

5 Smokey, Misty and Ian each have some buttons.

- Smokey and Misty have 59 buttons in total.
- Misty and Ian have 52 buttons in total.
- Smokey and Ian have 41 buttons in total.

How many buttons do they each have?



chooMantra – Its Magical !

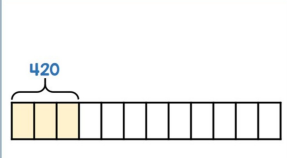
Apps, Skills, Gamification of education - <http://www.choomantra.com/rajeevgm-notes/apps/>

3 Questions 3 & 4

Mon 25 Nov **BARVEMBER** 2019

3 Caroline saves the same amount of money each month. She saves £420 in 3 months. How much does she save in a year?

4 Mo and Annie are each thinking of a number. $\frac{2}{3}$ of Mo's number is equal to $\frac{2}{5}$ of Annie's number. The difference between their numbers is 72. What is the sum of their numbers?

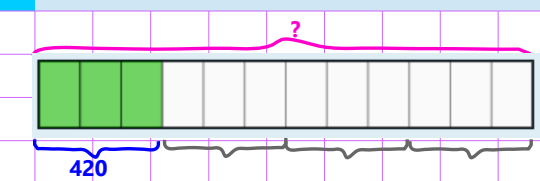


Mo

Annie

4 Answer for Question 3

A3

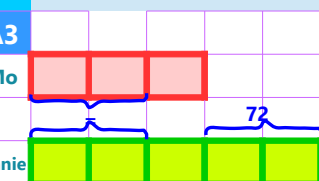


£1680 saved in a year

Amount saved in a year = $420 \times 4 = 1680$

7 Answer for Question 4

A3



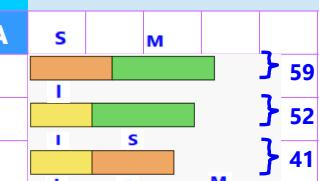
288 sum

Difference = $72 = 2$ parts

Sum = 8 parts = 4×2 parts = $4 \times 72 = 288$

8 Answer to Challenge Question 5

A



$(59 + 52 + 41) / 2 = 76$

Ian = All sum - $59 = 76 - 59 = 17$

Misty = $52 - \text{Ian} = 52 - 17 = 35$

Smokey = $41 - \text{Ian} = 41 - 17 = 24$

Ian: **17**

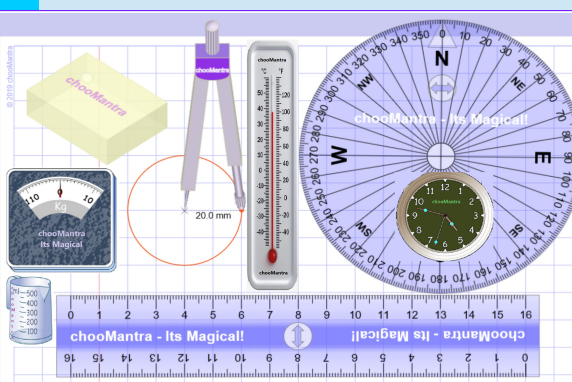
Misty: **35**

Smokey: **24**

chooMantra – Its Magical !

Play Animal Kingdom Game on Alexa – <http://bit.do/AlexaAnimalKingdomGame>

9 Part of chooMantra Maths Initiative




Download this sheet.


A3 and A4 size available for printing

Compiled, Edited & Designed by

Rajeev G. Mavinkurve



10 Essence of chooMantra




Light of Knowledge

Mantra - hidden secrets of Knowledge

@RajeevGM, @chooMantra

11 Alexa Animal Kingdom Game



Animal Kingdom Game by RajeevGM

Free to Enable

This is a single or multiplayer Animal Kingdom Quiz game by @RajeevGM.

Play Animal Kingdom Game and learn about animals, its sounds, collectives, young ones, etc.

12 Instructions to Enable and use Alexa Skill


Enable Skill

In Alexa app menu, select Skills. Search "Animal Kingdom Game RajeevGM". Click on the skill displayed and click on "Enable Skill".

Use Skill

After enabling the skill, switch on Alexa enabled device. Once ready say "Alexa, Launch Animal Kingdom Game"

OR visit <http://bit.do/AlexaAnimalKingdomGame>. And click on "Enable Skill". You will need to be logged into Alexa account



Give a man a bowl of rice, you feed him for a day. Teach him farming, you feed him for life.